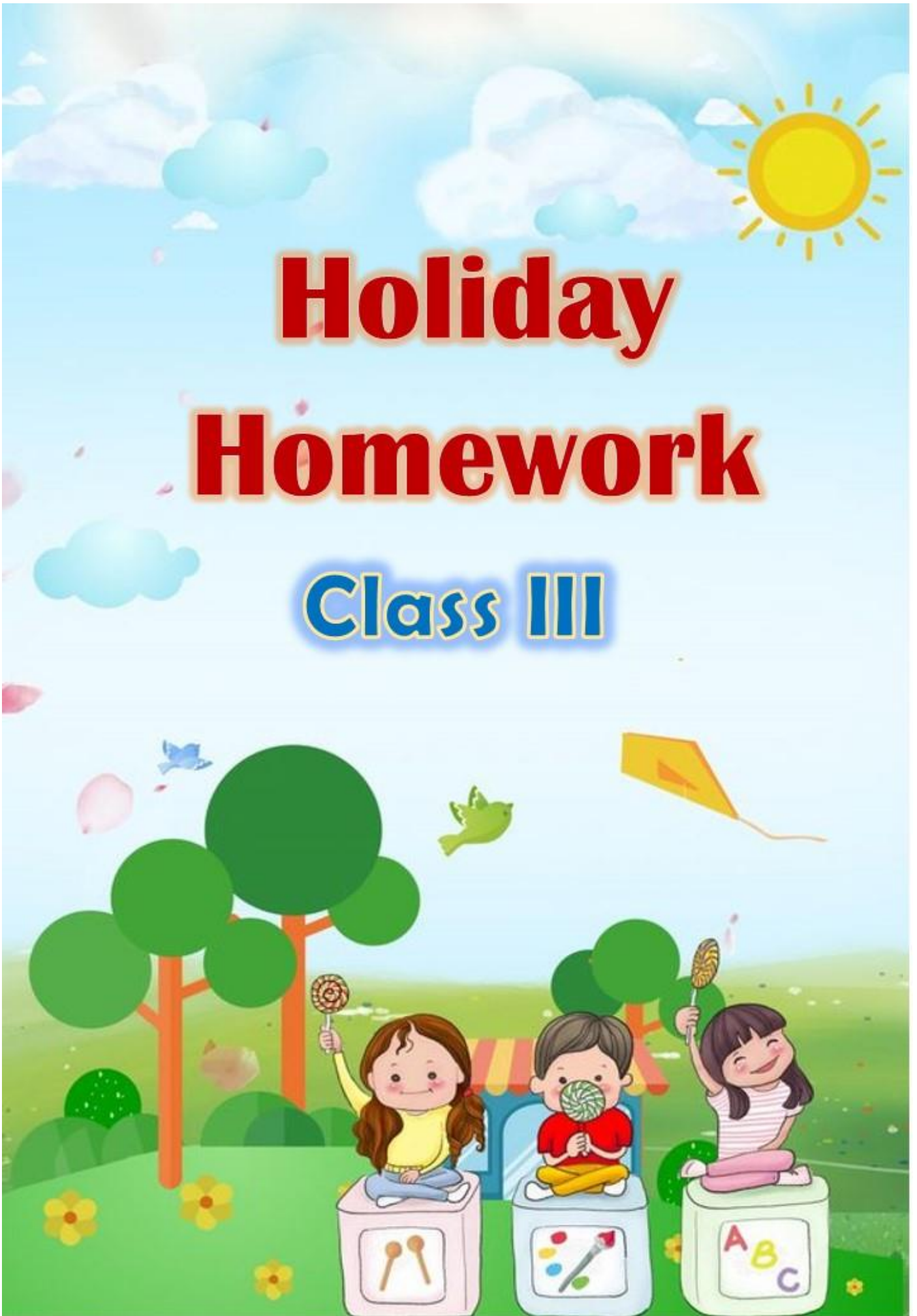


Holiday Homework

Class III





Dear Parents,

- Long awaited Summer Holidays have commenced. It is a time to relax, rejuvenate, refresh and regain health. It is also a time to reduce stress & increase productivity.
- Spend quality time with your kids and inculcate values.
- Help and guide your ward in doing Holiday Homework.
- Encourage your ward to converse in English.
- Do some kind of physical exercises with your kids.
- Read the Newspaper every day and encourage your ward to do so.

HAPPY
Holidays

**BE HAELTHY,
BE HAPPY**

Regards

GTB 011- 46575555



Worksheet 1**Subject: English****Class: III****Name: _____****Q1. Underline the proper nouns in these sentences and rewrite them correctly.**1. I have a pet dog named adolf.
_____2. Do visit the lotus temple when you are in delhi.
_____3. The amazon is a river in south america.
_____4. Nipun and renuka are watching a dance show.
_____**Q2. Pick out the common and the proper nouns in the following sentences. Write them in the space provided.**

1. Sunil Gavaskar is a cricketer.

P _____ C _____

2. My dog's name is Bruno.

P _____ C _____

3. My country is India.

P _____ C _____

4. Amitabh Bachchan is a famous actor.

P _____ C _____

Q3. Change the gender of the underlined nouns and rewrite the sentences.1. My mother is a teacher.

2. My brother pays the landlord every month.

3. The gentleman helped the dog.

4. The lion sat under a tree.

Q4. Fill in the blanks with the plurals of the nouns given in brackets.

1. Today our teacher made us do many interesting

_____.(activity)

2. Wash your _____ (foot) after returning from the playground.

3. Many _____ (goose) were swimming in the lake.

4. _____ (child) take pleasure in playing with friends.

Q5. Circle the collective nouns in the following sentences

1. A pair of shoes is lying near the door.

2. I have a good collection of stamps.

3. The policemen arrested a gang of thieves.

4. A choir of singers performed at the stage.

5. The class of pupils is listening to the teacher.

Worksheet 1Subject: HindiClass: IIIName: _____**प्रश्न1 नीचे लिखे वाक्यों पर सही ✓ या गलत X का चिह्न लगाओ।**

- 1) सुधीर ने बकरी, पक्षियों और चींटियों को काम में लगे देखा । ()
- 2) सुधीर अनुशासनप्रिय बालक था । ()
- 3) बकरी अपना घर बना रही थी। ()

प्रश्न2 निम्नलिखित शब्दों के अर्थ लिखिए।

- 1) अद्भुत _____ 2) क्रोधित _____
- 3) चमत्कार _____ 4) मुलायम _____

प्रश्न3 पूर्णविराम, अल्पविराम या प्रश्नवाचक चिह्न लगाओ-

- 1) अपना-अपना काम करो
- 2) हमें बड़ों का आदर करना चाहिए
- 3) कल तुम क्यों नहीं आईं
- 4) मेरे पिता जी मेरे लिए खिलौना लाए थे
- 5) क्या शीला मीरा और मीना पक्की सहेलियाँ हैं

प्रश्न4 निम्नलिखित शब्दों के दो - दो पर्यायवाची शब्द लिखिए।

- 1) आकाश _____
- 2) मित्र _____
- 3) फूल _____
- 4) वायु _____

Worksheet 1Subject: PunjabiClass: III

Name: _____

ਪ੍ਰਸ਼ਨ 1- ਓ ਤੋ ਵ ਤੱਕ ਦੀ ਲਾਈਨਾਂ ਲਿਖੋ:-

ਓ _____

ਕ _____

ਚ _____

ਪ੍ਰਸ਼ਨ 2- ਅੱਖਰਾਂ ਤੋਂ ਪਹਿਲਾਂ ਆਉਣ ਵਾਲੇ ਅੱਖਰ ਲਿਖੋ:-

_____ ਹ _____ ਖ _____ ਗ

_____ ਛ _____ ਵ _____ ਅ

_____ ਘ _____ ਸ _____ ਜ

ਪ੍ਰਸ਼ਨ 3- ਅੱਖਰਾਂ ਤੋਂ ਬਾਅਦ ਆਉਣ ਵਾਲੇ ਅੱਖਰ ਲਿਖੋ:-

ਚ _____ ਗ _____ ਸ _____

ਣ _____ ਜ _____ ਖ _____

ਥ _____ ਓ _____ ਅ _____

ਪ੍ਰਸ਼ਨ 4- ਦਿੱਤੇ ਹੋਏ ਚਿੱਤਰਾਂ ਨਾਲ ਅੱਖਰਾਂ ਦਾ ਮਿਲਾਨ ਕਰੋ:-

ਹ




ਕ



ਸ



ਅ



ਘ



ਜ



ਚ



Worksheet 1**Subject: Mathematics****Class: III****Name:** _____Q1. Put the symbol $<$, $>$ or $=$.

a) 3152 ○ 3276

b) 6317 ○ 8100

c) 701 ○ 9545

d) 3076 ○ 3067

Q2. Circle the smallest number.

a) 4322 4820 5590 4560

b) 7865 8765 8775 7685

Q3. Write in ascending order.

a) 1770, 5021, 2349, 3924 - _____

Q4. Make the smallest and the greatest 4-digit number using the given digits.

Digits	Smallest number	Greatest number
a) 5, 8, 1, 6		
b) 6, 5, 2, 0		

Q5. Write the predecessor and successor of the following.

Predecessor	Number	Successor
	5669	
	8451	

Q6. Expand the following numbers. Also write their number names.

Number	Expanded Form	Number Name
6497		
7015		

Worksheet 1**Subject: EVS****Class: III****Name:** _____**Chapter 1 Parts of our body.****Fill in the blanks**

1. The body parts which we can see from outside are called _____ body parts.
2. The parts which are inside our body and cannot be seen from outside are called _____ body parts.
3. Brain controls all our body _____.
4. Heart pumps _____ to all body parts.
5. Heart beats about _____ times in a minute.
6. An artificial foot, the Jaipur foot was invented by _____
7. We see with our _____
8. The eyelids and eyelashes protect our eyes from _____ and pollution.
9. Our _____ tells us about taste of different items.
10. There are some people who cannot see, hear, speak or walk like every one else .
They are _____ people

Worksheet 1**Subject: Computer****Class: III****Name: _____****Q1. Fill in the blanks: -**

- a) Printer is a _____ device.
- b) The _____ is used to copy and move data from one computer to another.
- c) The _____ can connect to multiple devices at a time.
- d) _____ is an application software.
- e) The three important parts of CPU are ALU, Memory Unit and _____ unit.

Q2. Write T for True and F for False: -

- a) A DVD stores more data as compared to a hard disk. ()
- b) A memory card can store photos and videos. ()
- c) The joystick is used to type text. ()
- d) Operating system is a part of system software that makes
a computer run. ()
- e) An optical mouse can connect to various devices at a time. ()

Q3. Answer the following questions: -

- a) What do you mean by Output devices? Name any two.**

- b) Explain System Software.**

c) Which device is used to record our voice on the computer?

d) What are storage devices? Name any two.

Q4. Write the full forms of the following:-

- a) USB _____
- b) LCD _____
- c) ALU _____
- d) DVD _____
- e) CRT _____
- f) LED _____

Q5. Tick the correct answer:-

1. Which among the following devices projects an image on a bigger screen?

- a) Scanner b) Monitor c) Projector

2. _____ unit performs all arithmetic and logical operations.

- a) CU b) ALU c) MU

3. _____ Printer produces high- quality text and graphics.

- a) Laser b) inkjet c) Joystick

Q6. Draw the following:-

Pen Drive, Speaker, CD, Memory Card





Worksheet 1Subject: GKClass: III

Name: _____

Q1. Jumbled Word:- (Trees around us)

1. GMNAO _____
2. EENM _____
3. EEPALP _____
4. NANABA _____

Q2. Rhyming Words: -

1. 	2. 	3. 	4. 

Q3. Fill in the blanks: -

1. The grapes were too high. The _____ could not reach them. So, he said that the grapes were sour and he did not want them.
2. The _____ and the hare ran a race. The hare decided to rest on the way. He _____ the race.
3. The _____ rabbit took the lion to a well. The lion saw his _____ in it.
4. Goldilocks ate a bowl of _____ in the house of three _____

Q4. Who am I?

1. I am Ruskin Bond. I write books
I am an _____.
2. I am A R Rahman. I compose music.
I am a _____.
3. I am Anjolie Ela Menon. I am known for my paintings.

I am an _____.

4. I am Sakshi Malik. I won a bronze medal in wrestling at the 2016 Summer Olympics.

I am a _____.

Worksheet 2**Subject: English****Class: III****Name: _____****Q1. Read the following passage carefully and answer the questions that follow: -**

All the children in the colony are happy. They are getting a new playground. There is a swinging bridge to go across from one side to another. It takes the children high up in the air. There are monkey bars for children. There are two see-saws. There are so many new things to do in this new playground. All the children are happy that they are getting a new playground.

On the basis of your reading, answer these questions.

a) How many swings are there in the park?

b) Why are the children in the colony happy?

c) Complete the given sentences.

1) There is a _____.

2) All the children are _____

d) Write the opposite of the following words from the passage.

sad _____

old _____

Q2. Write a short paragraph on “My School”.

2) What did he(the stranger) ask King Midas?

3) Where did the pedlar live?

4) What did he (the pedlar) tell his wife?

5) What stopped the poet from doing what he mean to do?

Worksheet 2Subject: HindiClass: IIIName: _____**प्रश्न1 सही उत्तर चुनकर ✓ का चिह्न लगाओ।**

1) सुधीर को विद्वान बनाना चाहता था?

माँ () अध्यापक () पक्षी ()

2) समय नष्ट कौन कर रहा था ?

अध्यापक () सुधीर () चींटी ()

प्रश्न2 उचित स्थान पर अनुस्वार(°) और अनुनासिक (ँ) लगाकर शब्द को दोबारा लिखें।

1) बदर _____ 2) तुरत _____

3) सुगध _____ 4) मा _____

5) गाव _____

प्रश्न3 निम्नलिखित शब्दों के विलोम शब्द लिखिए।

1) लेना _____ 2) गर्मी _____

3) सुबह _____ 4) सच _____

5) हार _____

प्रश्न4 निम्नलिखित प्रश्नों के उत्तर लिखिए।

1) अध्यापक और बच्चे हैरान क्यों थे ?

2) सुधीर ने खेलने की प्रार्थना किन - किनसे की?

Worksheet 2**Subject: Mathematics****Class: III****Name:** _____

Q1. Fill in the blanks using the properties of addition.

a) $99 + \underline{\quad\quad\quad} = 99$

b) $3054 + 102 = 102 + \underline{\quad\quad\quad}$

c) $7540 + 1 = \underline{\quad\quad\quad}$

d) $230 + (100 + 200) = 200 + (\underline{\quad\quad\quad} + 100)$

Q2. Write the place value and face value of the underlined digit.

Number	Place value	Face value
4 <u>5</u> 76		
213 <u>4</u>		
97 <u>6</u> 0		
<u>8</u> 818		

Q3. Add the following.

$$\begin{array}{r} 1043 \\ + 3240 \\ \hline \end{array}$$




$$\begin{array}{r} 843 \\ + 8255 \\ \hline \end{array}$$




$$\begin{array}{r} 1891 \\ + 7006 \\ \hline \end{array}$$

Q4. Abhinav and Riya love collecting stamps. Abhinav has 2860 stamps and Riya has 2109 stamps. How many stamps do they have in all?

--	--

Q5. Circle the correct shape for each picture.

		
cube/ sphere / cuboid	cone / cube / cylinder	cylinder/ cube / cone

		
cone / sphere /cylinder	sphere/ cylinder / cone	cuboid / cone / circle

Worksheet 2**Subject: EVS****Class: III****Name:** _____**Chapter 3 The Food we eat****Fill in the blanks**

1. A food item that contains about 96 percent of water is _____.
2. _____ is a complete food.
3. Always wash vegetables before peeling and _____.
4. Body building food items help the body to grow and repair the wear and _____.
- 5 Eating healthy is the key to good _____.
6. Cooking makes the food _____.
7. Food can be classified into three groups _____, _____ and _____.
8. Our daily diet should include food from all the groups in proper amounts. This is called _____.
9. Green leafy vegetables and fruits like guavas, mangoes, litchis, bananas etc are called _____.
10. Food gives us energy, helps us to grow and keeps us healthy and _____.